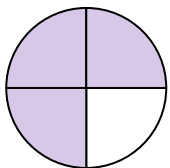




Determine which letter best describes the shaded portion.


Answers

1)




- A. three-fourths
B. one-quarter
C. four-fourths

2)



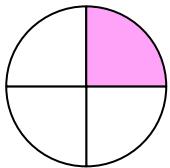
- A. one-fourth
B. one-half
C. four-fourths

3)



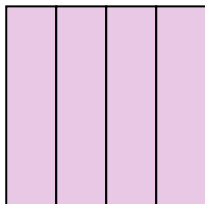
- A. one-half
B. four-quarters
C. two-halves

4)



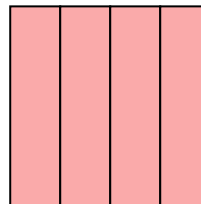
- A. two-quarters
B. one-quarter
C. two-halves

5)



- A. one-fourth
B. one-half
C. four-quarters

6)



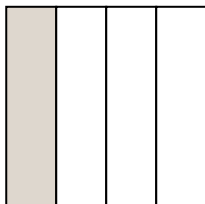
- A. one-fourth
B. one-half
C. four-fourths

7)



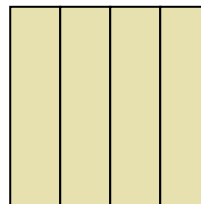
- A. two-halves
B. two-fourths
C. one-half

8)




- A. three-fourths
B. two-halves
C. one-fourth

9)



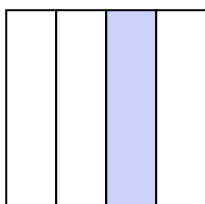
- A. one-half
B. two-quarters
C. four-fourths

10)




- A. two-halves
B. one-quarter
C. three-fourths

11)



- A. one-fourth
B. one-half
C. four-quarters

12)



- A. two-halves
B. three-quarters
C. one-half

1. _____

2. _____

3. _____

4. _____

5. _____

6. _____

7. _____

8. _____

9. _____

10. _____

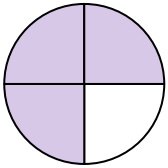
11. _____

12. _____




Determine which letter best describes the shaded portion.

1)




- A. three-fourths
B. one-quarter
C. four-fourths

2)



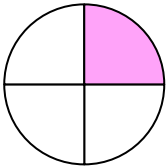
- A. one-fourth
B. one-half
C. four-fourths

3)



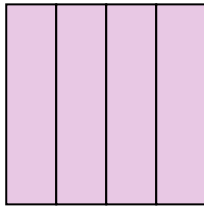
- A. one-half
B. four-quarters
C. two-halves

4)



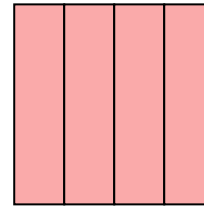
- A. two-quarters
B. one-quarter
C. two-halves

5)




- A. one-fourth
B. one-half
C. four-quarters

6)



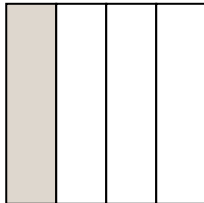
- A. one-fourth
B. one-half
C. four-fourths

7)



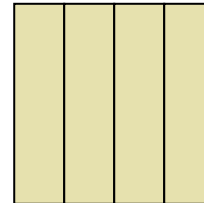
- A. two-halves
B. two-fourths
C. one-half

8)



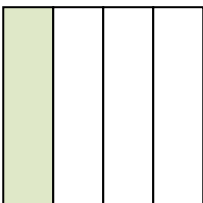
- A. three-fourths
B. two-halves
C. one-fourth

9)



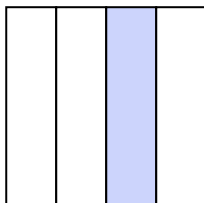
- A. one-half
B. two-quarters
C. four-fourths

10)




- A. two-halves
B. one-quarter
C. three-fourths

11)



- A. one-fourth
B. one-half
C. four-quarters

12)



- A. two-halves
B. three-quarters
C. one-half

Answers

1. **A**
2. **B**
3. **A**
4. **B**
5. **C**
6. **C**
7. **A**
8. **C**
9. **C**
10. **B**
11. **A**
12. **A**